

General Aptitude Test

Direction for Question No. 1 to 3

Find the correctly spelt words.

1. A) Forcast B) Forecaste **C) Forecast** D) Forcaust
2. A) Bouquete **B) Bouquet** C) Bouquette D) Boquet
3. A) Schedulle B) Schedeule C) Schdule **D) Schedule**

Direction for Question No. 4 to 6

Pick out the most effective words from the given words to fill in the blank to make the sentence meaningfully complete.

4. The telephone several times before I answered it.
A) Was ringing B) has rung **C) had rung** D) would ring
5. Jawaharlal spent his childhood Anand Bhawan.
A) **At** B) in C) on D) across
6. I have not seen you a week.
A) Within B) since **C) for** D) from

Direction for Question No. 7 & 8

In the following the questions choose the word which best expresses the meaning of the given word.

7. **Fake**
A) Original **B) Imitation** C) Trustworthy D) Loyal
8. **Abject**
A) Challenge **B) Miserable** C) Deny D) Disobey

Direction for Question No. 9 & 10

In the following the questions choose the word which is the exact Opposite of the given words.

9. Busy
A) Occupied B) Engrossed **C) Relaxed** D) Engaged
10. Obeying
A) **Ordering** B) Following C) Refusing D) Contradicting
11. What is the square root of 0.09 ?
A) **0.3** B) 0.03 C) 0.003 D) 3.0
12. Which one of them is the least ?
 $\sqrt{3}$, $^3\sqrt{2}$, $\sqrt{2}$, and $^3\sqrt{4}$
A) $\sqrt{3}$ B) $^3\sqrt{2}$ C) $\sqrt{2}$ D) $^3\sqrt{4}$
13. At 2:15 o' clock, the hour and minute hands of a clock form an angle of :
A) 30° **B) $45^{\circ}/2$** C) 60° D) 90°
14. The smallest 5-digit number exactly divisible by 41 is
A) 10041 **B) 10004** C) 10045 D) 10025
15. The ratio of two numbers is 3 : 4 and their H.C.F is 4. Their L.C.M is
A) 12 B) 16 C) 24 **D) 48**

16. By how much is three-fifth of 350 greater than four-seventh of 210 ?
 A) 95 **B) 90** C) 110 D) 120
17. If $(63)^2$ is subtracted from the square of a number the number so obtained is 6640. What is the number ?
 A) 101 **B) 103** C) 93 D) 105
18. The number of grams of water needed to reduce 9 grams of syrup solution containing 50% alcohol to a syrup containing 30% alcohol ?
 A) 3 B) 7 **C) 6** D) 5
19. In an examination it is required to get 46% of the aggregate marks to pass. A student gets 222 marks and is declared failed by 31 marks. What is the maximum aggregate marks a student can get?
 A) **550** B) 750 C) 800 D) 650
20. At present , the ratio between the ages of Arun and Deepak is 4 : 3. After 6 years, Arun's age will be 26 years. What is the age of Deepak at present ?
 A) 12 years **B) 15 years** C) 18 years D) 21 years
21. A reduction of 21% in the price of wheat enables a person to buy 10.5 kg more for Rs. 100/-. What is the reduced price per kg ?
 A) **Rs. 2** B) Rs. 2.25 C) Rs. 2.30 D) Rs. 2.50
22. 35 men can do a piece of work in 15 days. How many men would be required to do the same piece of work in 25 days ?
 A) 20 B) 42 C) 18 **D) 21**
23. 30% of 75% of $\frac{2}{3}$ of a number is 360. What is 30% of $\frac{3}{5}$ of that number ?
 A) 620 B) 520 **C) 720** D) 840
24. The length of a rectangle is 15 m and the width is 8 m, What is the ratio of the length and width?
 A) 12 : 7 **B) 15 : 8** C) 13 : 8 D) 19 : 6
25. A train having the length of 70 m runs 75 km per hour, within how much time the train will cross a station of 105 m length?
 A) 4.8 sec **B) 8.4 sec*** C) 44 sec D) 4.4 sec
26. If the simple interest on a certain sum at 5 % per annum for 3 years and 4 years differ by Rs. 42. The sum is :
 A) Rs. 310 B) Rs. 280 C) Rs. 750 **D) Rs. 840**
27. Find the missing number in the series 8, 24, 12, 36, 18, 54
 A) **27** B) 108 C) 68 D) 72
28. The diagonal of a rectangle is $\sqrt{41}$ cm and its area is 20 sq. cm. The perimeter of the rectangle must be
 A) 9cm **B) 18cm** C) 20cm D) 41cm
29. The average weight of A, B and C is 45 kg. If the weight of A and B 40 kg and that of B and C be 43 kg , then the weight of B is
 A) 17 kg B) 20 kg C) 26 kg **D) 31 kg**
30. The least number which when divided by 5,6,7 and 8 leaves a remainder 3, but when divided by 9 leaves no remainder is
 A) 1677 **B) 1682** C) 2523 D) 3363

Direction for Question No. 31 to 33

In each of the following questions, there is a certain relationship between given words on one side of :: and one word is given on another side of :: while another word is to be found from the given alternatives, having the same relation with this word as the words of the given pair bear. Find the correct alternative.

31. Assam : Bihu :: Kerala : ?

- A) **Kathakali** B) Kuchipudi C) Kathak D) Bharatnattiyam

32. Pulp : Paper :: Hemp : ?

- A) **Rope** B) Cotton C) Yarn D) Basket

33. Dog : Bark :: Pig : ?

- A) Bleat B) Howl C) **Grunt** D) Bray

Direction for Question No. 34 to 36

In the following questions four words have been given, choose the word which is least like the other three words in the group.

34. A) Curd B) Butter C) **Oil** D) Cheese

35. A) Assasinate B) Kill C) **Kidnap** D) Stab

36. A) Sleet B) Fog D) Hailstone **D) Vapour**

37. Which of the following pairs of letters will complete the series ?

W V T S Q P N M ? ?

- A) J K B) **K J** C) J I D) I J

38. Find the missing term of the series GBI, HDI, IFK ?

- A) KHI B) KHL C) **JHL** D) JIL

39. 583 is related to 293 in the same way as 488 is related to

- A) 581 B) 487 C) 378 **D) 291**

40. Umbrella is related to Rain in the same way as Goggles is related to

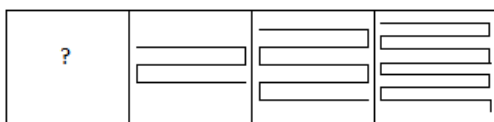
- A) Light B) **Glare** C) Stare D) sight

Direction for Question No. 41 to 43

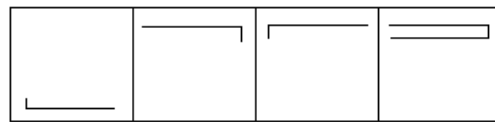
Find the figure from the answer figure which will complete the series

41.

PROBLEM FIGURE



ANSWER FIGURE



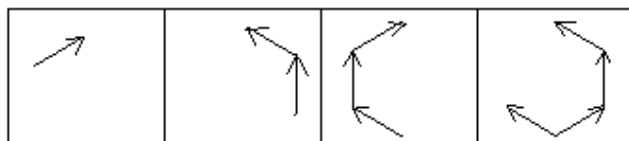
A) A

B) B

C) C

D) D

42.



A

B

C

D

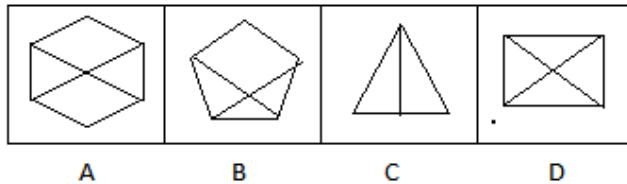
A) A

B) B

C) C

D) D

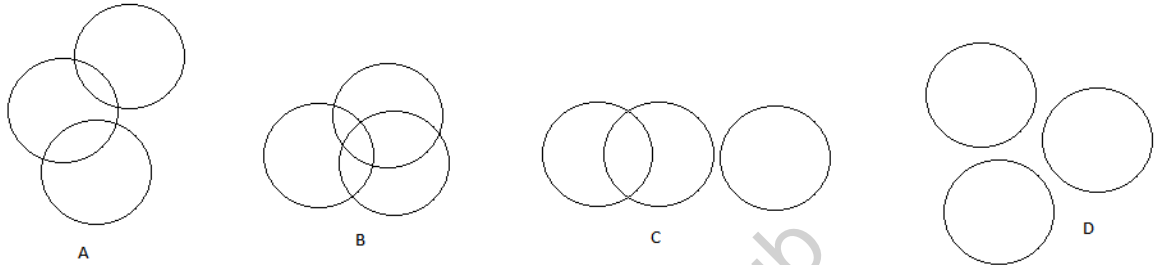
43.



- A) A B) B C) **C** D) D

44. Find which Venn diagram suits best to the statement

DOG, HORSE, SPARROW



(ANSWER -D)

45. Sahithi who is facing South turns to her left and walks 15 m, then she turns to her left and walks 7 m, then facing West she walks 15 m. How is she from her original position?

- A) 10 m B) **7 m** C) 30 m D) 15 m

46. Pointing of a man, Rohit said, " his son is my son's uncle." How the woman is related to the man ?

- A) Brother B) Uncle C) **Father** D) Grand Father

47. LATE is written in a certain code as 38. How will you code 'MAKE' using same coding scheme ?

- A) **30** B) 28 C) 32 D) 40

48. If **water** is called **blue**, **blue** is called **red**, **red** is called **white**, **white** is called **sky**, **sky** is called **rain**, **rain** is called **green** and **green** is called **air**, which of the following is the colour of milk ?

- A) **Sky** B) Green C) White D) Rain

Direction for Question No. 49 & 50

Following questions consists of two words each that have a certain relationship to each other, followed by four lettered pairs of words. Select the lettered pair that has the same relationship as the original pair of words printed in bold.

49. Insect: Crop

- A) **Moth : Wool*** B) Fibre : Jute C) Thread: Cloth D) Neem : Cotton

50. Sailor: Pirate

- A) Police: Robbers B) Lion:Lamb C) Major: Sepoy D) **Plant: Fungus***

51. The Indian National Army was formed by

- A) Gandhiji B) **Subhash Chandra Bose***
C) Bal Gangadhar Tilak D) Lala Lajpal Rai

52. First woman Governor in India

- A) Sucheta Kripalani B) Padmaja Naidu C) **Sarojini Naidu*** D) Amrit Kaur

53. Who won Miss India 2014 title ?
A) Navneet Kaur Dhillion **B) Koyal Rana** C) Jhataleka Malhotra D) None of these
54. Who has been appointed as Deputy Governor of Reserve Bank of India (RBI) on April 3, 2014 replacing Anand Sinha ?
A) **R Gandhi** B) Urijt Patel C) KC Chakarborty D) HR Khan
55. March 8 is celebrated as International Women's Day. This was started in the year.....
A) 1920 **B) 1911** C) 1890 D) 1970
56. Milk is an example of
A) **Colloid*** B) Solution C) Suspension D) None of these
57. Collar bone is known as
A) **Clavicle*** B) Patella C) Coracoids D) Scapula
58. A noble metal is
A) Iron B) Copper C) **Platinum*** D) Chromium
59. "Coco island" is located between
A) India-Bangladesh **B) India-Myanmar** C) India-Pakistan D) India-Srilanka
60. The river originates at Amarkantak is
A) Yamuna B) Godavari C) Tapti **D) Narmada**
61. First Noble Prizes were awarded in the year of
A) 1900 B) **1901*** C) 1903 D) 1905
62. Subramaniam Chandrashekhar was Awarded Nobel prize for
A) Literature B) Medicine C) **Physics*** D) Economics
63. The Lok Sabha secretariat in India works under the supervision of the
A) Minister of Parliamentary affairs B) **Speaker***
C) Prime Minister D) Home Minister
64. The minimum distance between the sun and the earth occurs on
A) December 24 B) June 21 C) September 22 D) **January 3***
65. The term 'epicenter' is associated with
A) **Earthquakes*** B) Folding C) Faulting D) Earth's interior
66. Riboflavin is a/an
A) Enzyme B) Antibiotic C) **Vitamin*** D) Colouring agent
67. In which game the term Tee is used?
A) Football B) Baseball C) **Golf*** D) Cricket
68. The Ellora is famous for its caves of
A) **Buddhist, Hindu and Jain*** B) Only Buddhist C) Only Hindu D) Hindu and Jain
69. Which one is known as Pink city
A) **Jaipur*** B) Udayapur C) Kolkata D) Delhi
70. The Great Barrier Reef is located in
A) Andamans B) **Australia*** C) South Africa D) North America
71. The World Scout Bureau is in
A) Canada B) **Geneva*** C) France D) India

72. Who among the following call the Indian federation as “co-operative federalism”
A) **Granville Austin** B) K.C. Wheare C) Harold J.Laski D) None of these
73. Who is appointed as the Brand Ambassador Of Telangana?
A) Saina Nehwal **B) Sania Mirza** C) Mehesh Bhupathi D) Dipika Padukone
74. Who wrote the recently published autobiography “**One life is Not Enough**”?
A) Sanjaya Baru B) Brajesh Mishra C) Arjun Singh **D) Natwar Singh**
75. Which country top the medals tally in commonwealth games in 2014 ?
A) Australia **B) England** C) Scotland D) India
76. Which movie wins the best award in the 61st National Film Awards, 2014
A) Lunch Box **B) Bhaag Mikha Bhaag** C) Shahid D) Ship of Theseus
77. Alexander invaded India in
A) 298 BC **B) 327 BC*** C) 330 BC D) 347 BC
78. The Civil disobedience movement followed the
A) Declaration of Home Rule B) Partition of Bengal
C) Dandi March **D) Declaration of Poorna Swaraj***
79. Which among the following is the biosphere reserve is located in Madhya Pradesh ?
A) **Pachmarthi Biosphere Reserve** B) Nilgiri Biosphere Reserve
C) Nandadevi D) Great Nicobar Biosphere Reserve
80. Who amongst the following is the author of the book “Freedom from Fear ?
A) Nelson Mandela **B) Aung San Suukvi** C) Taslima Nasreen D) Benazir Bhutto